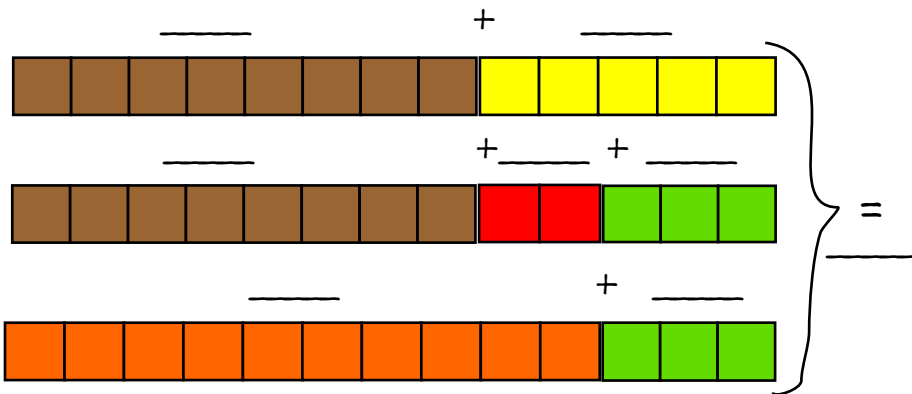



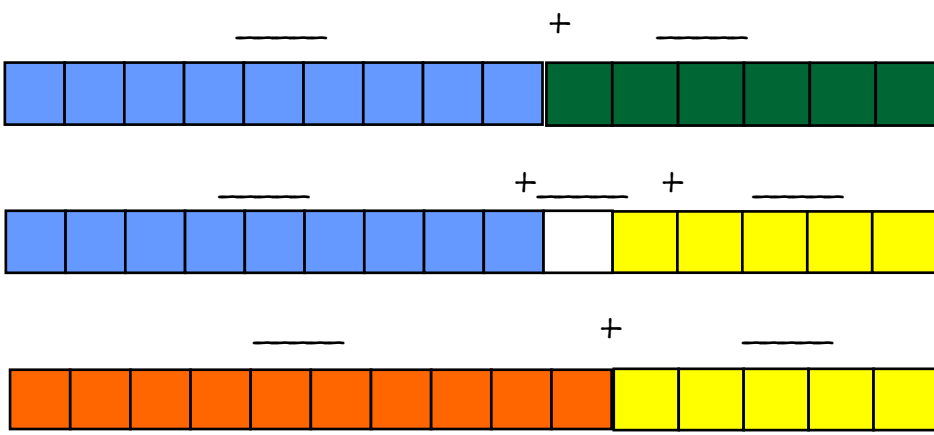
Wir rechnen in **2** Schritten: Zuerst zum vollen Zehner!



Schritt 1 (Eierschachtel)



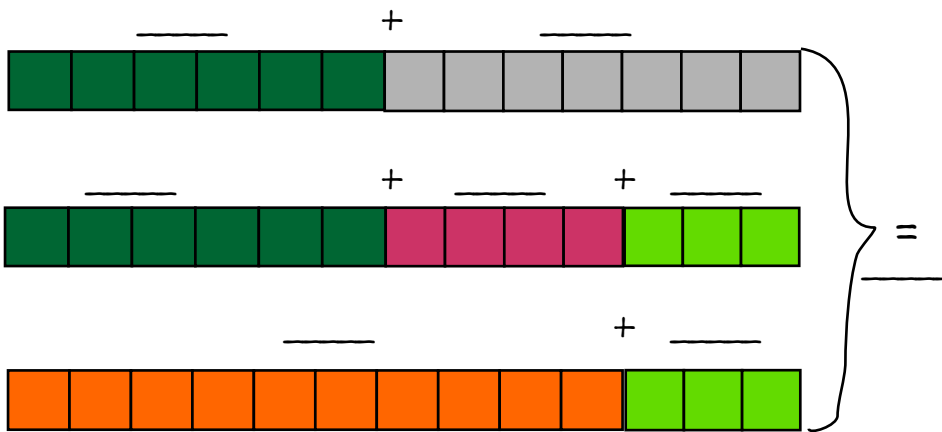
$8 + \underline{\quad} = 10$




Schritt 1



$9 + \underline{\quad} = 10$



Schritt 1



$6 + \underline{\quad} = 10$

$5 + 7 = \underline{\quad}$

$9 + 3 = \underline{\quad}$

$5 + 8 = \underline{\quad}$

$6 + 8 = \underline{\quad}$

$7 + 5 = \underline{\quad}$

$4 + 7 = \underline{\quad}$

$9 + 9 = \underline{\quad}$

$4 + 9 = \underline{\quad}$

$9 + 6 = \underline{\quad}$

Name: _____ Datum: _____ Kl. _____ Fach: _____

Name: _____ Date: _____ Cl. _____ Subject: _____