



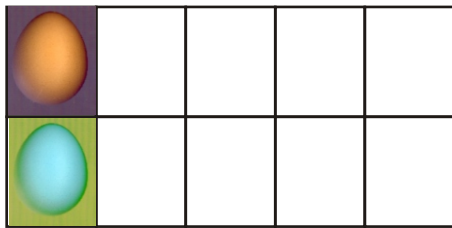
Wie viel Ostereier  fehlen in der Schachtel?
 How many Easter eggs  are missing in the box?




$$5 + \underline{\quad} = 10$$




$$4 + \underline{\quad} = 10$$



$$2 + \underline{\quad} = 10$$



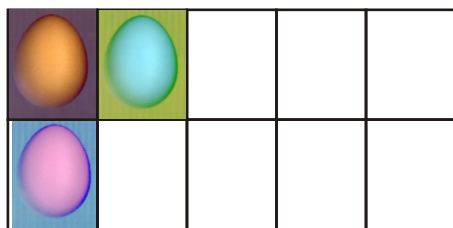
$$5 + \underline{\quad} = 10$$



$$7 + \underline{\quad} = 10$$



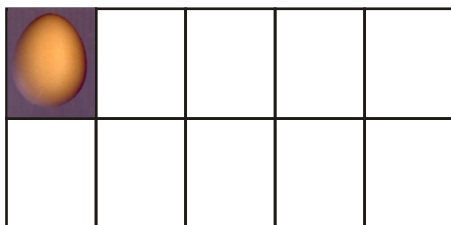
$$9 + \underline{\quad} = 10$$



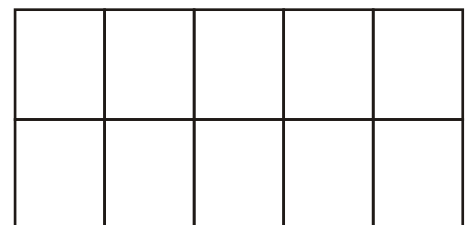
$$3 + \underline{\quad} = 10$$



$$6 + \underline{\quad} = 10$$



$$1 + \underline{\quad} = 10$$



$$0 + \underline{\quad} = 10$$

1. Male die fehlenden Eier in die Eierschachtel! Paint the missing eggs in the box.

Name: _____ Datum: _____ Kl.: _____ Fach: _____

Name: _____ Date: _____ Cl.: _____ Subject: _____